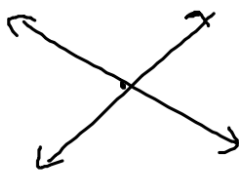


Sec 3-1

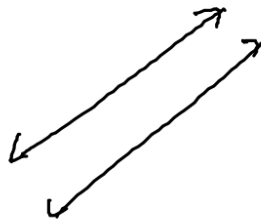
System of Linear Equations

$$\begin{cases} 2x + y = 5 \\ x - y = -2 \end{cases}$$


Possible Solutions



One Solution
Independent



No Solution
Inconsistent




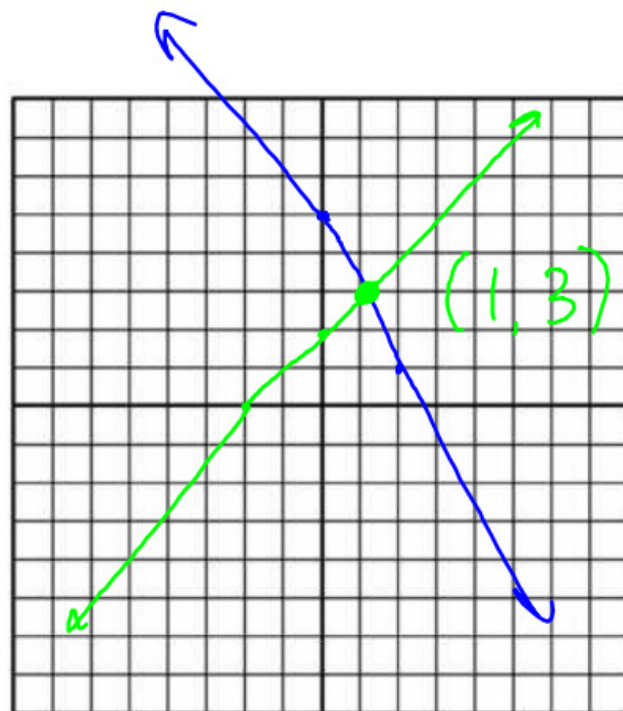
Infinite Solutions
Dependent

Solving Systems

- Graphing
- Elimination
- Substitution

Solve By Graphing

$$\begin{cases} 2x + y = 5 \\ x - y = -2 \end{cases}$$



Classify Without Graphing

$$\begin{cases} y = 2x + 6 \\ y = 2x - 3 \end{cases} \rightarrow \text{Parallel} \rightarrow \text{Inconsistent}$$

$$\begin{cases} y = 2x + 1 \\ y = 2x + 1 \end{cases} \rightarrow \text{Same Line} \rightarrow \text{Dependent}$$

$$\begin{cases} y = 2x + 1 \\ y = \frac{1}{2}x - 3 \end{cases} \rightarrow \text{Intersecting} \rightarrow \text{Independent}$$

Sec 3-2

Solve By Substitution

$$\begin{cases} 2x - 3y = 6 \\ x + y = -12 \end{cases} \rightarrow x = \boxed{-y - 12}$$

$$2(-y - 12) - 3y = 6$$

$$-2y - 24 - 3y = 6$$

$$-5y - 24 = 6$$

$$-5y = 30$$

$$y = -6$$

$$x = -(-6) - 12$$

$$x = 6 - 12 = -6$$

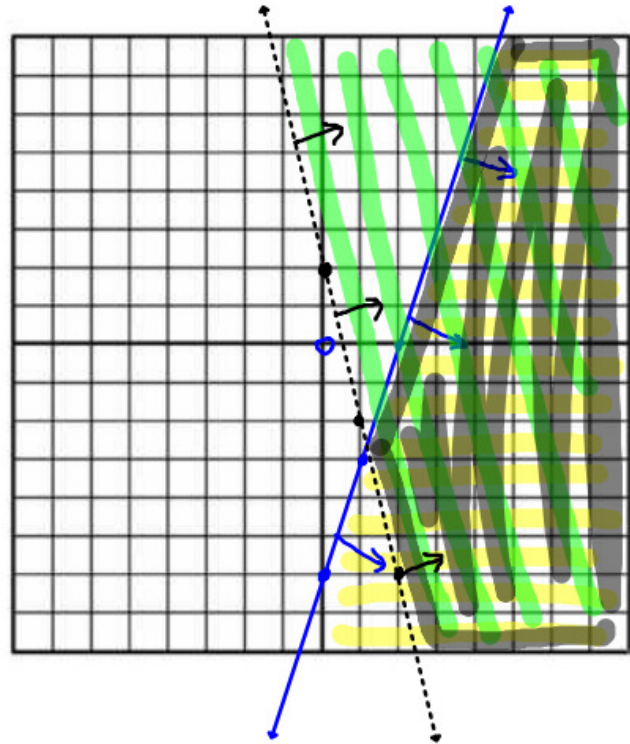
$$(-6, -6)$$

By Elimination

$$\begin{array}{lcl} \left\{ \begin{array}{l} 3x - 2y = 14 \\ 2(x + y = 3) \end{array} \right. & \rightarrow & \begin{array}{l} 3x - 2y = 14 \\ 2x + 2y = 6 \end{array} \\ & & \hline & & 5x = 20 \\ & & x = 4 \\ & & \vdots \\ & & \vdots \\ & & \vdots \end{array}$$
$$\begin{array}{l} 4 + y = 3 \\ y = -1 \\ (4, -1) \end{array}$$

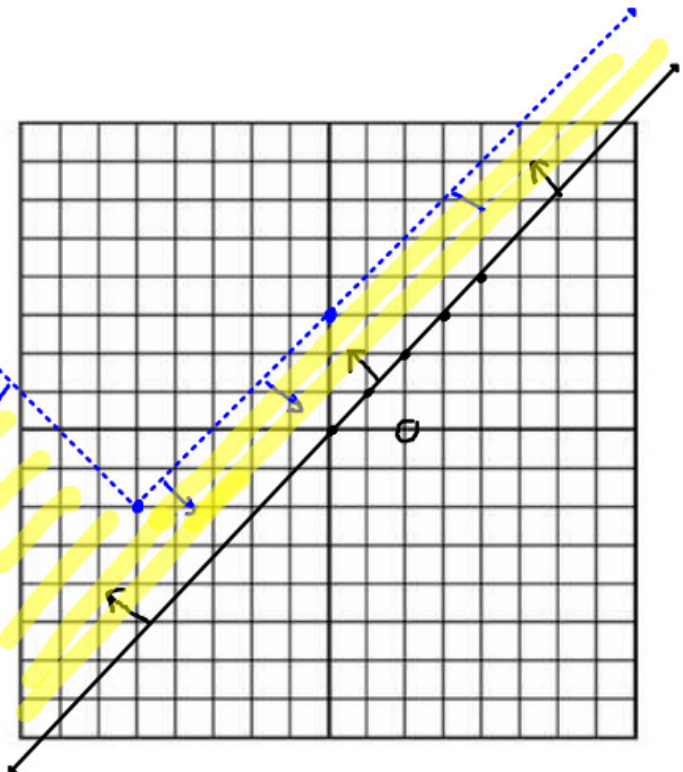
Sec 3-3

$$\begin{cases} y \leq 3x - 6 \\ y > -4x + 2 \end{cases}$$



$$\begin{cases} y \geq x \\ y < |x + 5| - 2 \end{cases}$$

x	y
0	3



Sec 3-4

Linear Programming

A furniture manufacturer can make from 30 to 60 tables a day and from 40 to 100 chairs a day. At most, it can make 120 units in one day. The profit on a table is \$150 and the profit on a chair is \$65. How many tables and chairs should they make every day to maximize profit? How much is that profit?

i) Label variables : write all inequalities (constraints)

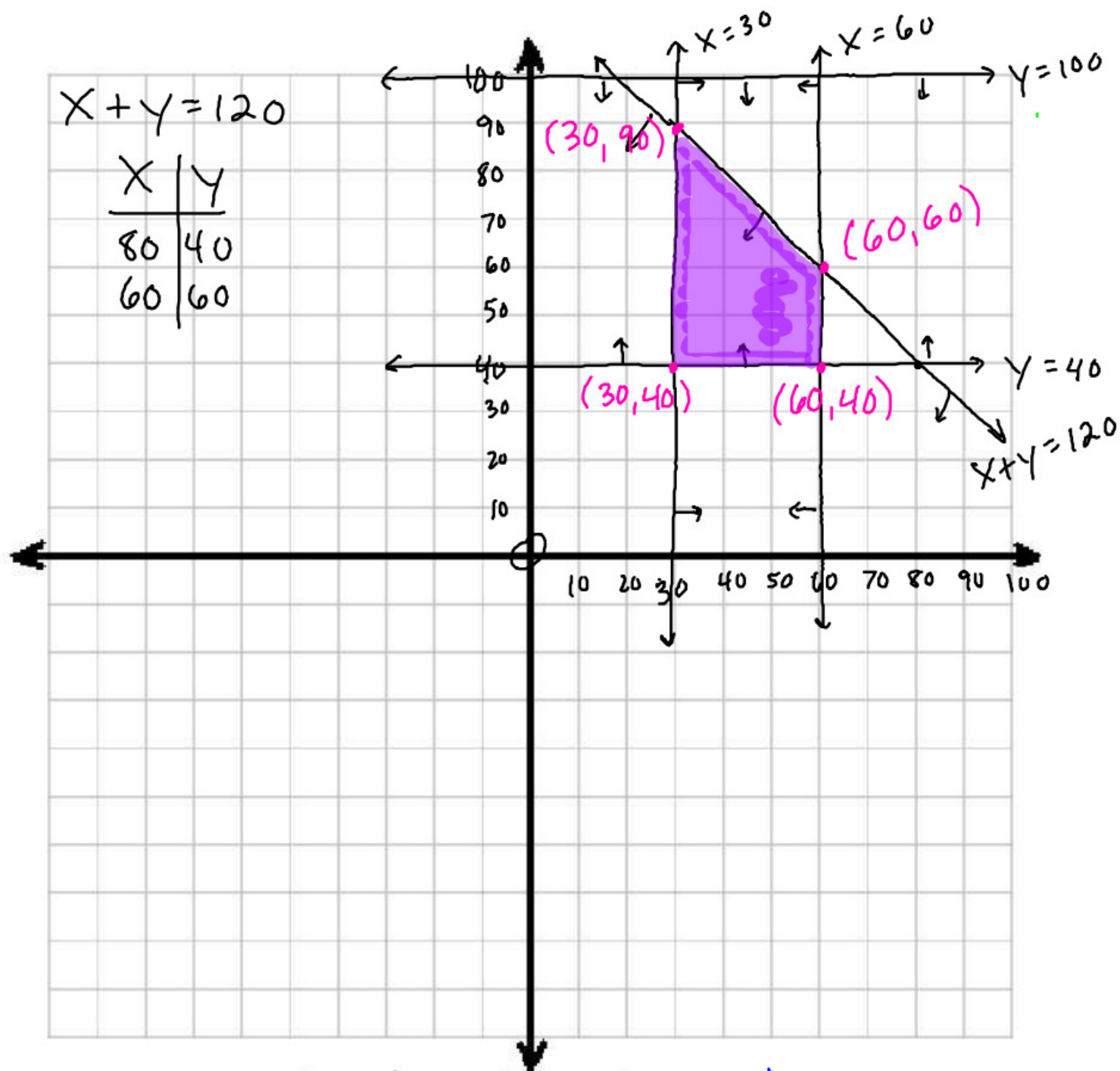
X = # of tables made in a day

Y = # of chairs made in a day

$$X \geq 30 \quad Y \geq 40 \quad X + Y \leq 120$$

$$X \leq 60 \quad Y \leq 100$$

2) Graph Inequalities i Constraints



3) Find coordinates of each vertex

4) Write profit / cost equation ; Evaluate

$$P = 150x + 65y$$

$$P = 150(30) + 65(90) = \$10,350$$

$$P = 150(60) + 65(40) = \$11,600$$

→ $P = 150(60) + 65(60) = \$12,900$


$$P = 150(30) + 65(40) = \$7,100$$

Secs 3-5 and 3-6

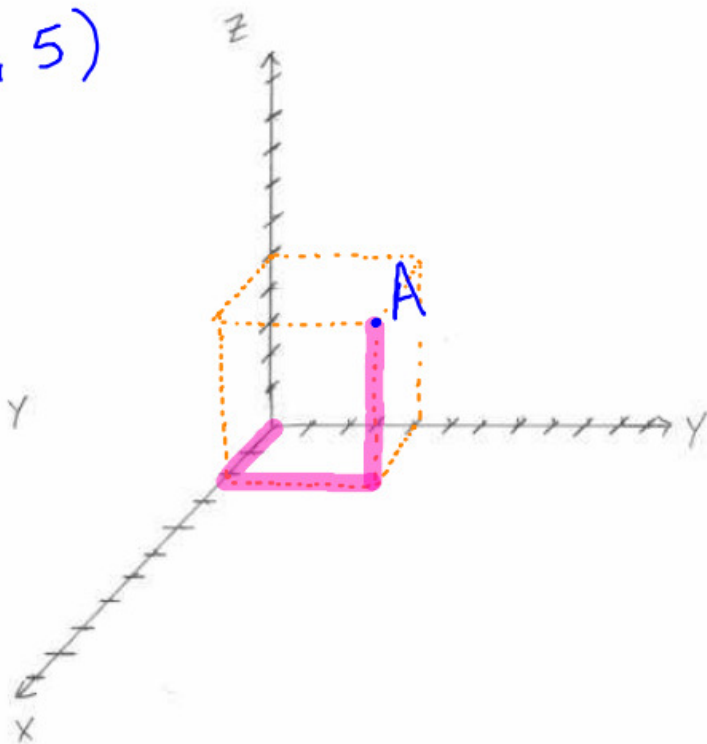
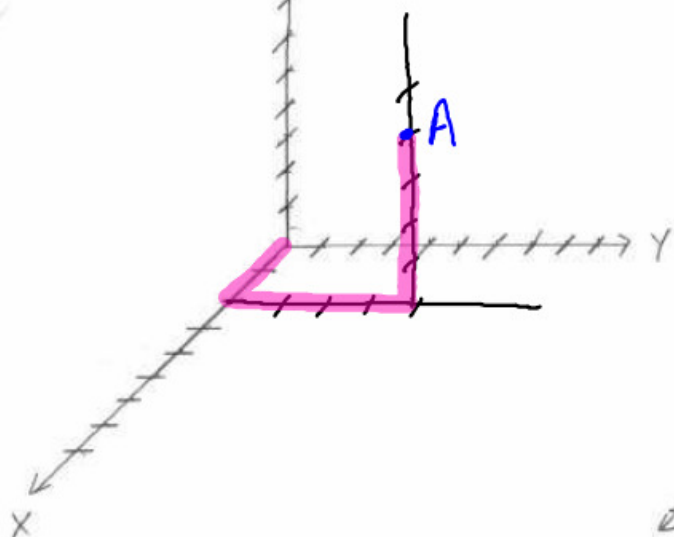
Graphs In Space

- $A(x, y, z)$

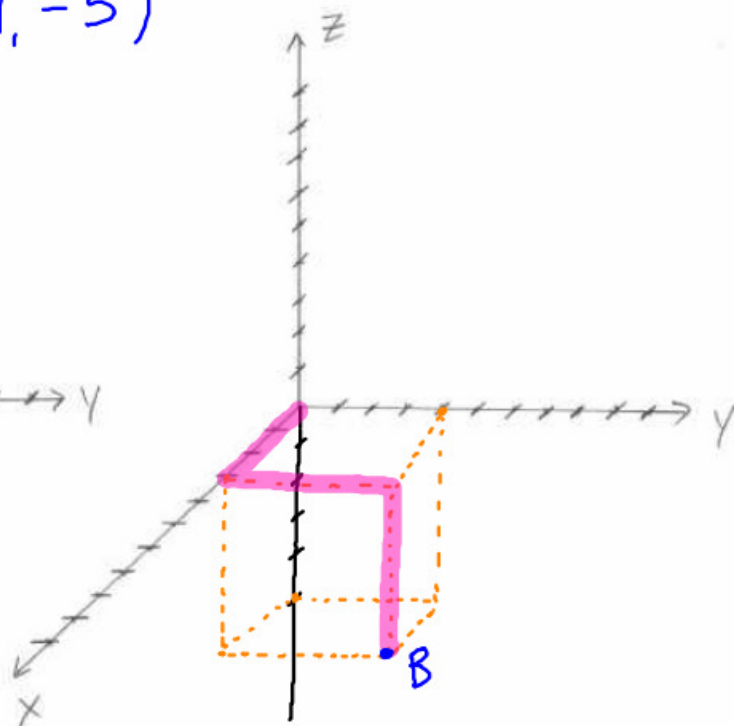
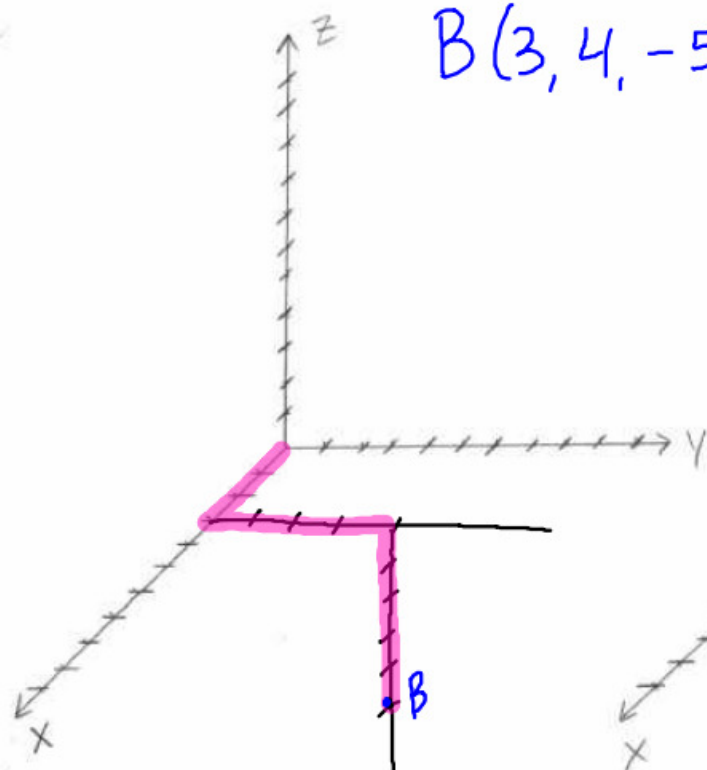
$$Ax + By + Cz = D$$



$A(2, 4, 5)$



$B(3, 4, -5)$

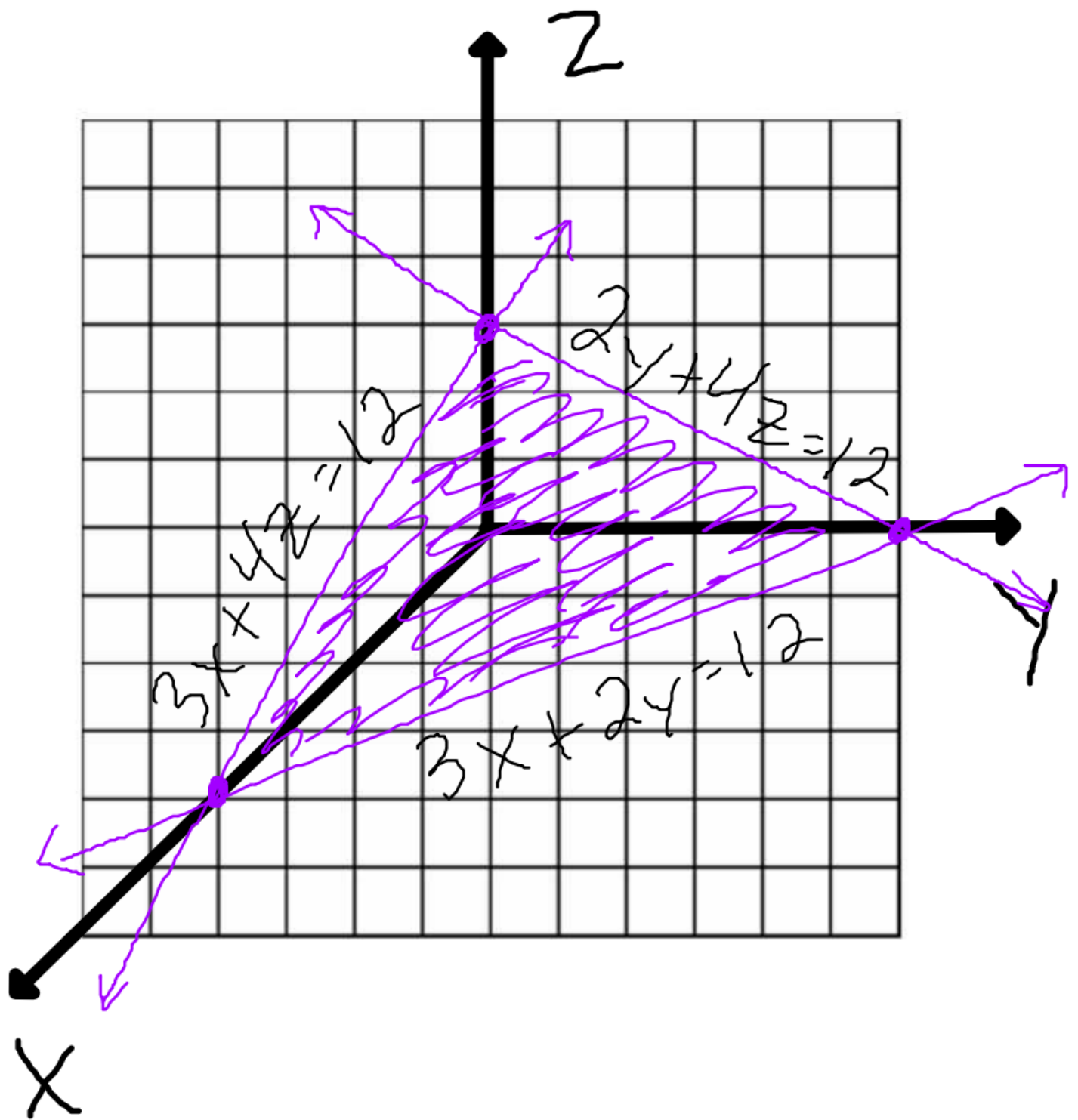


Graphing Planes

Ex $3x + 2y + 4z = 12$

x	y	z
4	0	0
0	6	0
0	0	3

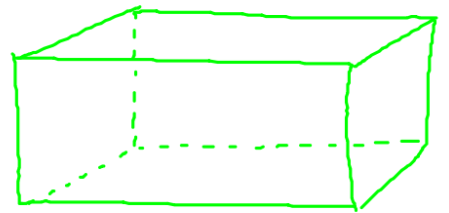
} Find x, y and z intercepts



$$3x + 2y + 4z = 12$$

Systems With 3 Variables

- No Solution
- Infinite Solutions
- Exactly One Solution



Solving Systems

- Substitution
- Elimination

Solve By Substitution

$$\begin{cases} X + 3y - z = -4 \rightarrow X = -3y + z - 4 \\ 2X - y + 2z = 13 \\ 3X - 2y - z = -9 \end{cases}$$

$$2(-3y + z - 4) - y + 2z = 13 \rightarrow 4z - 7y = 21$$

$$3(-3y + z - 4) - 2y - z = -9 \rightarrow 2z - 11y = 3$$

$$2(2z - 11y = 3)$$

$$4z - 22y = 6$$

$$4z = 22y + 6$$

$$4z - 7y = 21$$

$$(22y + 6) - 7y = 21$$

$$15y = 15$$

$$y = 1 \rightarrow z = 7 \rightarrow x = 0$$

$$(0, 1, 7)$$

Solve By Elimination

$$\begin{cases} -2(X + 2y + z = 4) \rightarrow \\ 2x - y + 4z = -8 \rightarrow \\ 3x - y + 2z = 1 \end{cases}$$

$$\begin{aligned} -2x - 4y - 2z &= -8 \\ 2x - y + 4z &= -8 \end{aligned}$$

$$\boxed{-5y + 2z = -16}$$

$$\begin{aligned} -3(X + 2y + z = 4) &\rightarrow \\ 3x - y + 2z &= 1 \end{aligned}$$

$$\begin{aligned} -3x - 6y - 3z &= -12 \\ 3x - y + 2z &= 1 \end{aligned}$$

$$\boxed{2(-7y - z = -11)}$$

$$\begin{aligned} -14y - 2z &= -22 \\ -5y + 2z &= -16 \end{aligned}$$

$$\hline -19y = -38$$

$$y = 2$$

$$\downarrow$$
$$z = -3$$

$$\downarrow$$
$$x = 3$$

$$(3, 2, -3)$$