

DO THE FOLLOWING ON Pp 514-516 :

1.

2.

3.

7.

8.

9.

13.

14.

15.

20.

21.

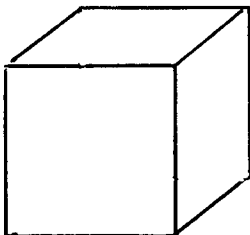
22.

23.

29 a. ___ Tetrahedron ___ Hexahedron ___ Octahedron
___ Dodecahedron ___ Icosahedron

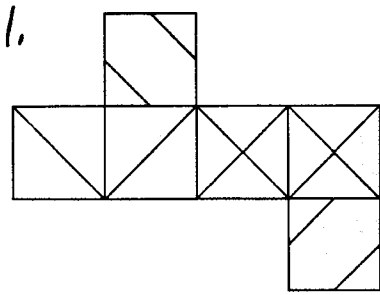
b. Tetrahedron → _____ Hexahedron → _____

34.

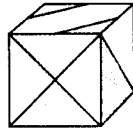


39.

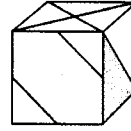
MATCH THE NET WITH THE SOLID :



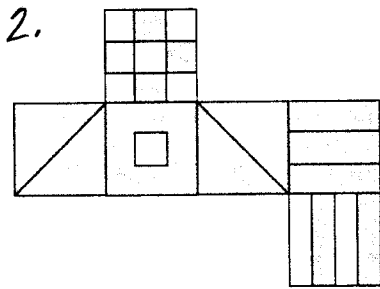
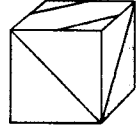
a.



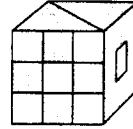
b.



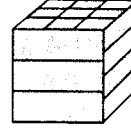
c.



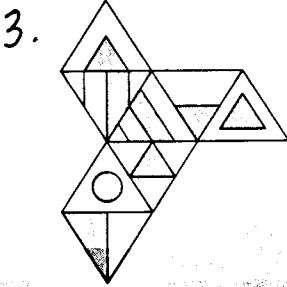
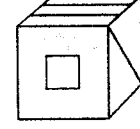
a.



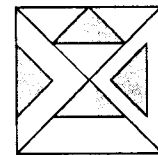
b.



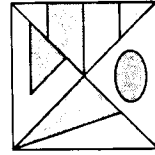
c.



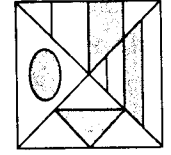
a.



b.

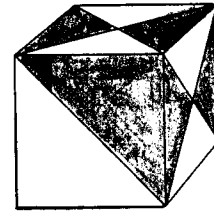
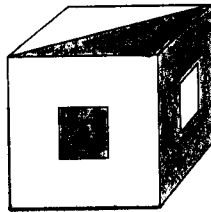
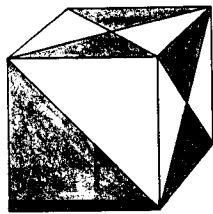


c.

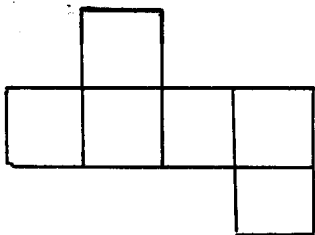

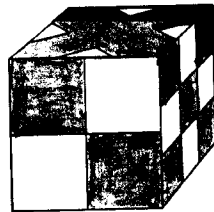



USE THE FOLLOWING VIEWS OF A CUBE TO DRAW A NET :

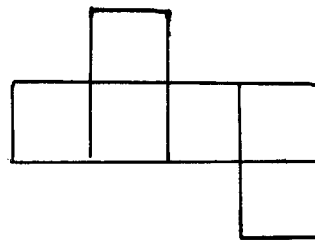
4.



5.



Use #4



Use #5