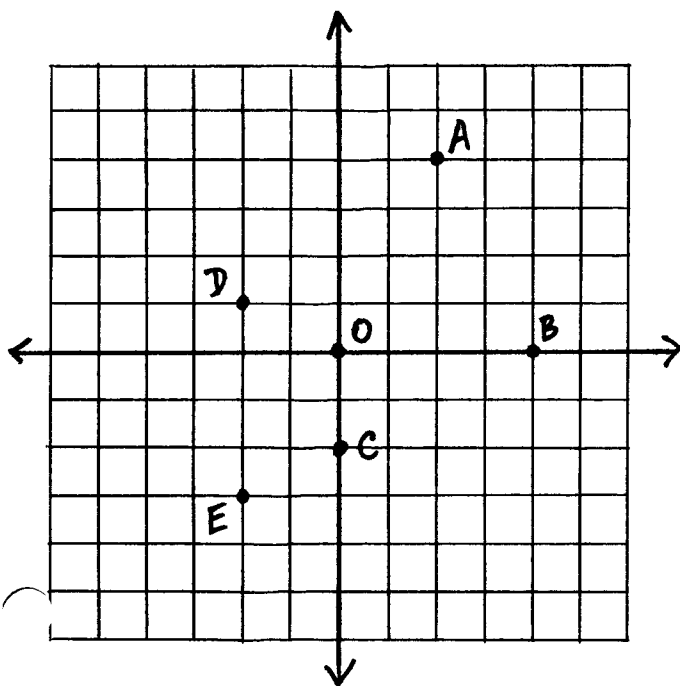
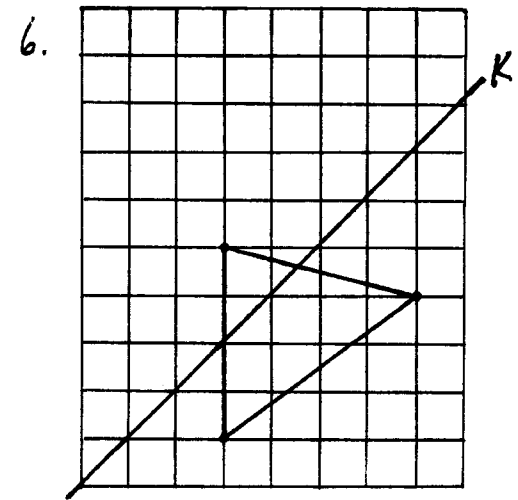
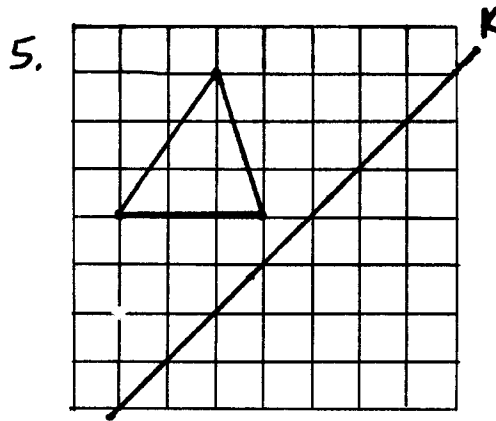
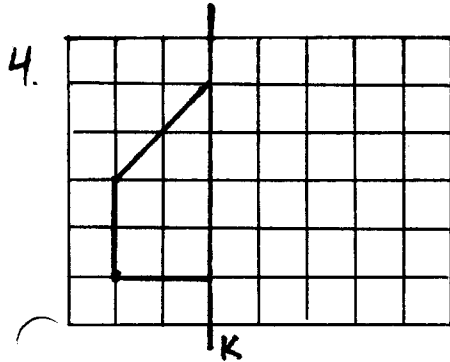
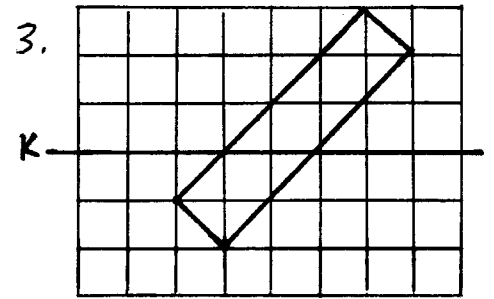
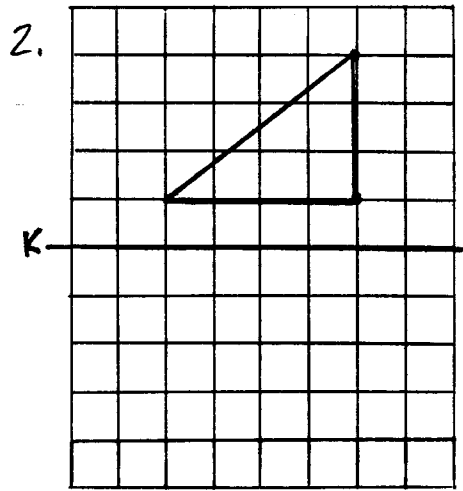
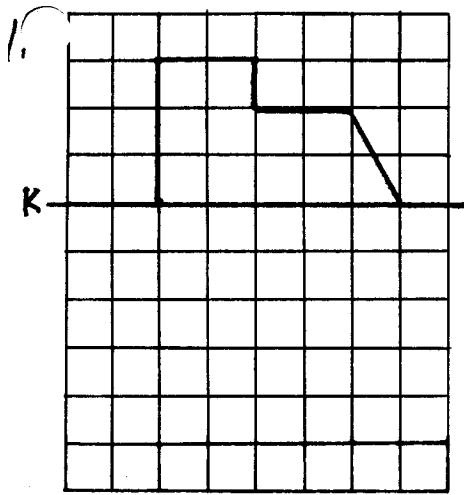


Sec 7.2

REFLECTIONS

DRAW THE IMAGE OF EACH FIGURE BY REFLECTION IN LINE K:



WRITE THE COORDINATES OF EACH POINT BY REFLECTION IN a) THE X-AXIS, b) THE Y-AXIS AND c) THE LINE  $y=x$ :

7. A a. \_\_\_\_\_ b. \_\_\_\_\_ c. \_\_\_\_\_

8. B a. \_\_\_\_\_ b. \_\_\_\_\_ c. \_\_\_\_\_

9. C a. \_\_\_\_\_ b. \_\_\_\_\_ c. \_\_\_\_\_

10. D a. \_\_\_\_\_ b. \_\_\_\_\_ c. \_\_\_\_\_

11. E a. \_\_\_\_\_ b. \_\_\_\_\_ c. \_\_\_\_\_

12. O a. \_\_\_\_\_ b. \_\_\_\_\_ c. \_\_\_\_\_

13. (x,y) a. \_\_\_\_\_ b. \_\_\_\_\_ c. \_\_\_\_\_

Exs 7-12