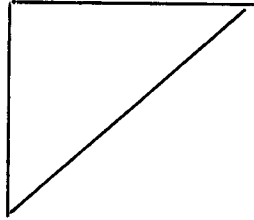


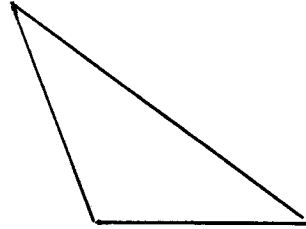
CONSTRUCTIONS

CONSTRUCT THE CIRCUMSCRIBED CIRCLE ABOUT EACH TRIANGLE:

1.

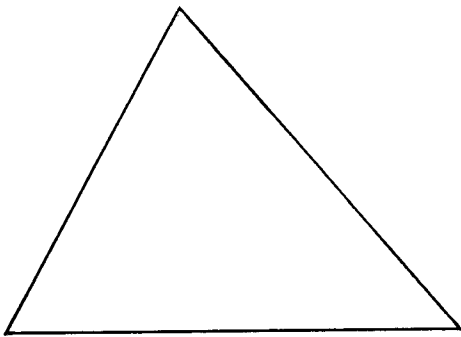


2.

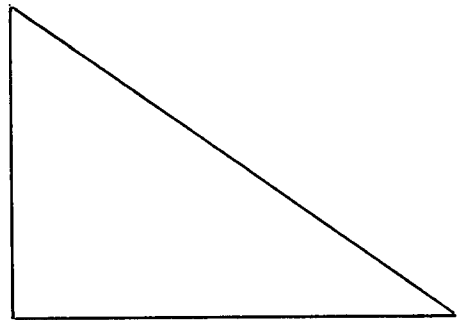


CONSTRUCT THE INSCRIBED CIRCLE IN EACH TRIANGLE:

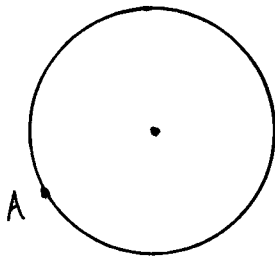
3.



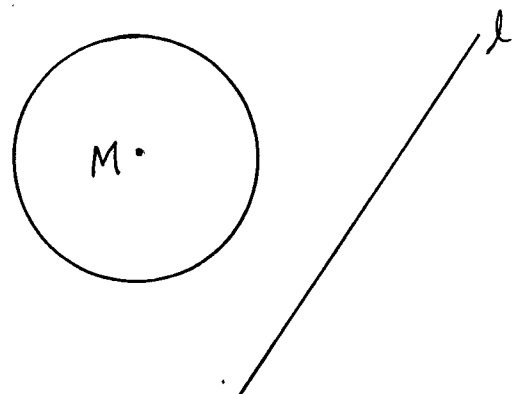
4.



5. CONSTRUCT A TANGENT AT
A:



6. CONSTRUCT A LINE PARALLEL
TO l AND TANGENT TO OM :



7. DRAW A CIRCLE AND INSCRIBE A REGULAR OCTAGON
IN THE CIRCLE :

8. DRAW A CIRCLE ; INSCRIBE AN EQUILATERAL TRIANGLE
IN THE CIRCLE AND CIRCUMSCRIBE AN EQUILATERAL
TRIANGLE ABOUT THE CIRCLE :